

Sl. No. : 330004

P.G. ENTRANCE TEST, MAY 2013.

Test Name : 5 YEARS INTEGRATED MBA (INTERNATIONAL BUSINESS)

HALL TICKET No. :

--	--	--	--	--	--	--	--

Signature of the Candidate

Signature of the Invigilator

**INSTRUCTIONS TO CANDIDATES**

This question paper booklet consists of **THREE** Sections A, B and C. Sections A and B contain 30 multiple choice questions each. Section C contain 40 Multiple choice questions.

Clearly write your Hall Ticket Number in the space provided on the question paper booklet (if necessary on the OMR answer sheet) without corrections or overwriting. If any correction is made, get it certified by the invigilator.

You are prohibited from writing your name or Hall Ticket No. on any part of the Question paper booklet or on the OMR answer sheet except in the space provided.

No paper should be detached from the question paper booklet and it should be returned to the invigilator along with the OMR answer sheet.

You are supplied with OMR answer sheet for answering the questions.

Before you start answering, please read the instructions given in the OMR answer sheet.

Do not toil/mutilate/scribble the OMR answer sheet.

For answering the questions darken the appropriate circle completely with HB pencil only.

If you wish to change your answer, erase already darkened circle and then darken the appropriate circle.

Do not make any stray marks/scribble on the bar code of the OMR answer sheet.

Any rough work should be done in the space provided at the end of the question paper booklet.

(Test No. 33)

Test Name : 5 YEARS INTEGRATED MBA (INTERNATIONAL BUSINESS)

Time : 90 minutes

Maximum : 100 marks

Answer ALL questions.

Each question carries ONE mark.

SECTION A

SEQUENCES AND SERIES (10 QUESTIONS)

1. Rill : Stream :: Pony:?

(a) Mare

(b) Mule

(c) Donkey

(d) Horse

2. Loiter : Dwindle :: Impugn:?

(a) Challenge

(b) Gamble

(c) Confiscate

(d) Revenge

3. Chisel : Sculptor

(a) Scooter : Rider

(b) Brush : Teeth

(c) Scalpel : Surgeon

(d) Knife : Woodcutter

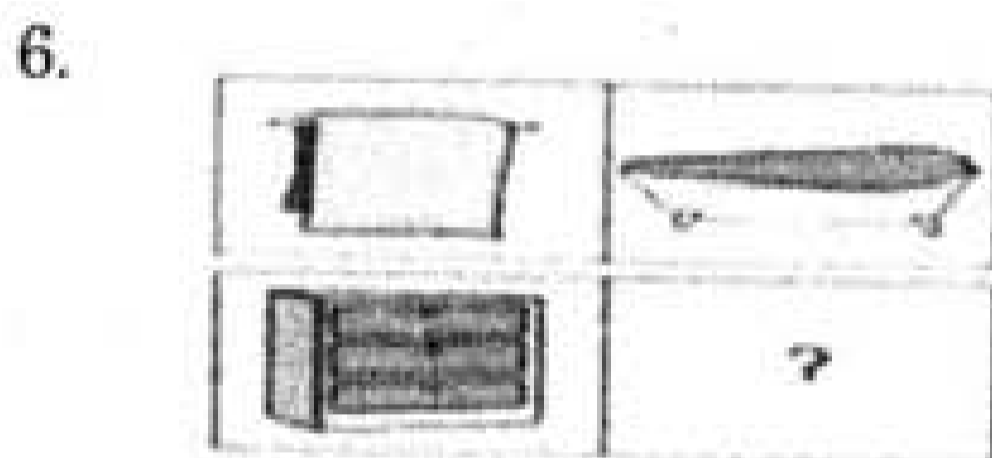

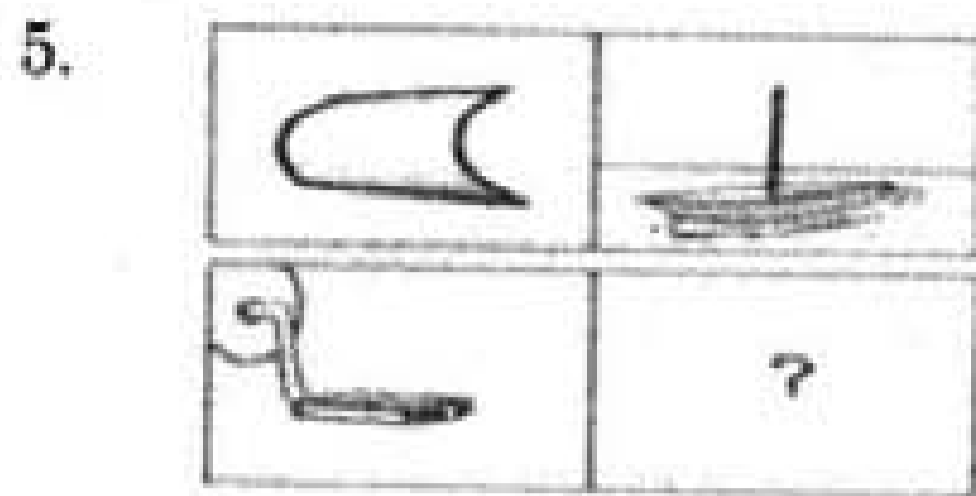
4. Look at this series : 1.5, 2.3, 3.1, 3.9,.....What number should come next?

(a) 4.2

(b) 4.4

(c) 4.7

(d) 5.1



7. Look at this series : 544, 509, 474, 439,....What number should come next?

(a) 404

(b) 414

(c) 420

(d) 445

8. CMM, EOO, GQQ, \_\_\_\_\_, KUU

(a) GRR

(b) GSS

(c) ISS

(d) ITT

9. Arrange the words given below in a meaningful sequence.

1. Protect

2. Pressure

3. Relief

4. Rain

5. Flood

(a) 2, 4, 3, 1, 5

(b) 2, 4, 5, 1, 3

(c) 2, 5, 4, 1, 3

(d) 3, 2, 4, 5, 1

10. \_bcdbc\_dcabd\_bcdbc\_dc\_bd.

(a) aaaaa

(b) ccccc

(c) bbbbb

(d) ddddd

ANALOGY (FIND THE ODD. ~~www.eenadupratibha.net~~ QUESTIONS)

11. 46080, 3840, 384, 48, 24, 2,1  
(a) 1 (b) 2  
(c) 24 (d) 48
12. 445, 221, 109, 46,25, 11, 4  
(a) 221 (b) 109  
(c) 46 (d) 25
13. (a) Kiwi (b) Eagle  
(c) Emu (d) Ostrich
14. (a) Potassium (b) Silicon  
(c) Zirconium (d) Gallium
15. (a) Rhea (b) Trout  
(c) Lamprey (d) Salmon
16. (a) Crust (b) Mantle  
(c) Core (d) Volcano
17. (a) Sailor (b) Tailor  
(c) Goldsmith (d) Blacksmith
18. (a) Fawn (b) Mermaid  
(c) Minerva (d) Sphinx
19. (a) YDWB (b) TKRI  
(c) QNOM (d) HLFJ
20. (a) Sambhar (b) Dal  
(c) Baikal (d) Siachen

DATA ANALYSIS (10 QUESTIONS)

21. Which of the following diagram indicates the best relation between Author, Lawyer and Singer?



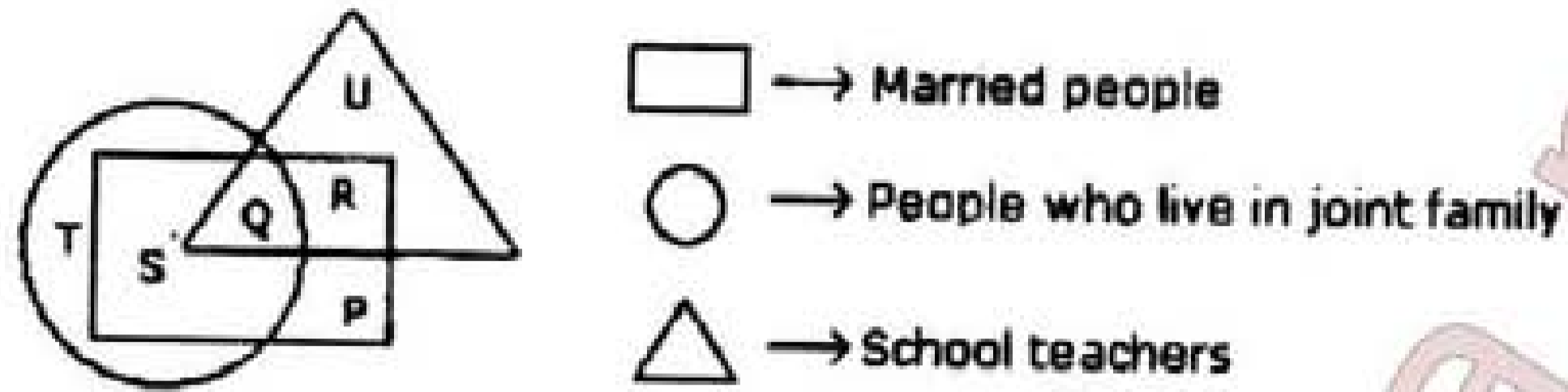
22. Which of the following diagram indicates the best relation between Tall men, Black haired people and Indians?



23. Which of the following diagram indicates the best relation between Gold, Metal and Zinc?



Study the following figure and answer the questions given below.



24. By which letter, the married teachers who live in joint family are represented?

- (a) R (b) Q  
(c) S (d) P

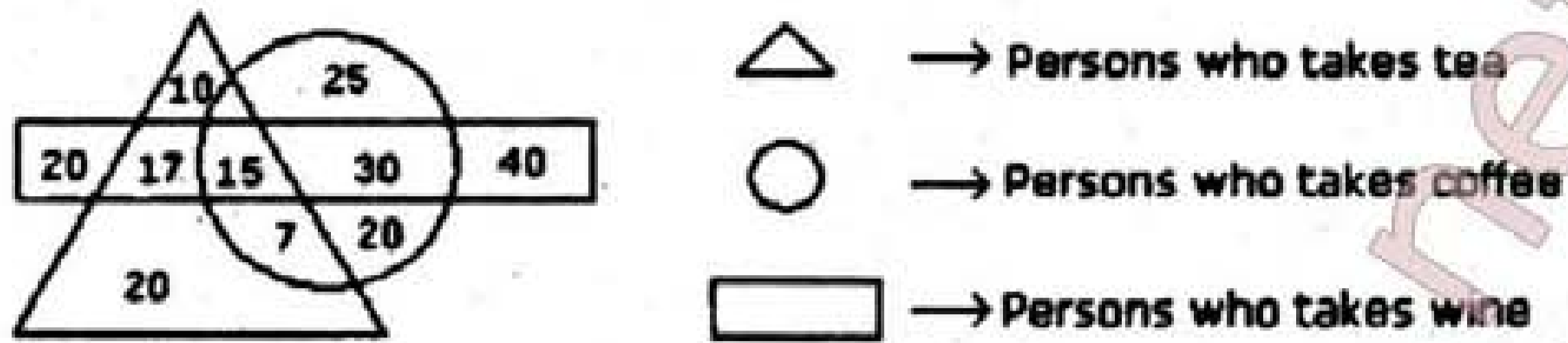
25. By which letter, the married people who live in joint family but not are school teachers are represented?

- (a) R (b) U  
(c) S (d) P

26. By which letter, the people who live in joint family but are neither married nor teachers are represented?


- (a) T (b) R  
(c) Q (d) S

Study the diagram given below and answer each of the following questions.



27. How many persons are there who take both tea and coffee but not wine?  
 (a) 22 (b) 17  
 (c) 7 (d) 20
28. How many persons take all the three?  
 (a) 20 (b) 17  
 (c) 25 (d) 15

The circle-graph given here shows the spending of a country on various sports during a particular year. Study the graph carefully and answer the questions given below it.



29. How much percent more is spent on Hockey than that on Golf?  
 (a) 27% (b) 35%  
 (c) 37.5% (d) 75%
30. If the total amount spent on sports during the year was Rs.2 crores, the amount spent on Cricket and Hockey together was:  
 (a) Rs. 8,00,000 (b) Rs. 80,00,000  
 (c) Rs. 1,20,00,000 (d) Rs. 1,60,00,000

SECTION B

CODING AND DECODING (10 QUESTIONS)

31. If in a certain language, MADRAS is coded as NBESBT, how is BOMBAY coded in that code?
- (a) CPNCBX (b) CPNCBZ  
(c) CPOCBZ (d) CQOCBZ
32. In a certain code, COMPUTER is written as RFUVQNPC. How is MEDICINE written in the same code?
- (a) EOJDJEFM (b) EOJDEJFM  
(c) MFEJDJOE (d) MFEDJJOE
33. In a certain code, TOGETHER is written as RQEGRJCT. In the same code, PAROLE will be written as :
- (a) NCPQJG (b) NCQPJG  
(c) RCPQJK (d) RCTQNC
34. If in a certain language if ENTRY is coded as 12345 and STEADY is coded as 931785, then state which is the correct code for below word. ENDEAR
- (a) 524519 (b) 174189  
(c) 128174 (d) 124179
35. In as a certain code, 15789 is written as EGKPT and 2346 is written ALUR. How is 23549 written in that code?
- (a) ALEUT (b) ALGTU  
(c) ALGUT (d) ALGRT



36. In a certain code, 15789 is written as XTZAL and 2346 is written as NPSU. How is 23549 written in that code?
- (a) NPTUL (b) PNTSL  
(c) NPTSL (d) NBTSL
37. A, B, C, D and E are sitting on a bench. A is sitting next to B, C is sitting next to D, D is not sitting with E who is on the left end of the bench. C is on the second position from the right. A is to the right of B and E. A and C are sitting together. In which position A is sitting?
- (a) Between B and D (b) Between B and C  
(c) Between E and D (d) Between C and E
38. Six friends P, Q, R, S, T and U are sitting around the hexagonal table each at one corner and are facing the centre of the hexagonal. P is second to the left of U. Q is neighbour of R and S. T is second to the left of S. Which of the following are the neighbours of P?
- (a) U and P (b) T and R  
(c) U and R (d) Data inadequate
39. Introducing a boy, a girl said, "He is the son of the daughter of the father of my uncle." How is the boy related to the girl?
- (a) Brother (b) Nephew  
(c) Uncle (d) Son-in-law
40. Introducing a woman, Shashank said, "She is the mother of the only daughter of my son." How that woman is related to Shashank?
- (a) Daughter (b) Sister-in-law  
(c) Wife (d) Daughter-in-law

41. What day is the 26<sup>th</sup> if the 3<sup>rd</sup> of the month is Wednesday?
- (a) Sunday (b) Tuesday  
(c) Thursday (d) Friday
42. The last day of a century cannot be
- (a) Monday (b) Wednesday  
(c) Tuesday (d) Friday
43. It was Sunday on January 1<sup>st</sup> 2006. What was the day of the week on January 1<sup>st</sup> 2010?
- (a) Sunday (b) Saturday  
(c) Wednesday (d) Friday
44. The angle between the minute hand and the hour hand of a clock when the time is 4.20, is :
- (a) 0° (b) 10°  
(c) 5° (d) 20°
45. A watch which gains uniformly is 2 minutes low at noon on Monday and is 4 min. 48 sec fast at 2 p.m. on the following Monday. When was it correct?
- (a) 2 p.m. on Tuesday (b) 2 p.m. on Wednesday  
(c) 3 p.m. on Thursday (d) 1 p.m. on Friday
46. Rahul put his time piece on the table in such a way that at 6 P.M. hour hand points to North. In which direction the minute hand will point at 9.15 P.M.?
- (a) South-East (b) South  
(c) North (d) West

47. From his house, Lokesh went 15 km to the North. Then he turned west and covered 10 km. Then he turned south and covered 5 km. Finally turning to the east, he covered 10 km. In which directions is he from his house?

- (a) East (b) West  
(c) North (d) South

48. If  $A + B$  means A is the sister of B;  $A \times B$  means A is the wife of B,  $A \% B$  means A is the father of B and  $A - B$  means A is the brother of B. Which of the following means T is the daughter of P?

- (a)  $P \times Q \% R + S - T$  (b)  $P \times Q \% R - T + S$   
(c)  $P \times Q \% R + T - S$  (d)  $P \times Q \% R + S + T$

Each of these questions is based on the following information :

$M \% N$  means M is the son of N.

$M @ N$  means M is the sister of N.

$M \$ N$  means M is the father of N.

49. Which of the following shows the relation that C is the grand daughter of E?

- (a)  $C \% B \$ F \$ E$  (b)  $B \$ F \$ E \% C$   
(c)  $C @ B \% F \% E$  (d)  $E \% B \$ F \$ C$

50. Which of the following shows the relation that S is the father of Q?

- (a)  $S @ P \$ Q$  (b)  $Q @ P \% S$   
(c)  $Q \$ S @ P$  (d) None of these

COMMUNICATION ABILITY :

Directions : (Questions from 51 to 55) Read the each sentence to find out whether there is any grammatical error in it. The error, if any will be in one part of the sentence. The letter of that part is the answer. If there is no error, the answer is 'D'. (Ignore the errors of punctuation, if any)

51. (a) The Indian radio  
(b) Which was previously controlled by the British rulers  
(c) Is free now from the narrow vested interests  
(d) No error.
52. (a) Having received your letter (b) This morning, we are writing  
(c) To thank you for the same (d) No error
53. (a) The students were (b) Awaiting for  
(c) The arrival of the chief guest (d) No error
54. (a) Last month we celebrated  
(b) The wedding of our sister for whom  
(c) We have been looking for a suitable alliance for three years  
(d) No error
55. (a) The single biggest gainer in this process  
(b) Was ITC's Gold Flake Kings sales are Estimated  
(c) To have moved up from 50 million to 200 million sticks per month during 1987 and last year  
(d) No error

COMMUNICATION ABILITY :

Directions : (Questions from 51 to 55) Read the each sentence to find out whether there is any grammatical error in it. The error, if any will be in one part of the sentence. The letter of that part is the answer. If there is no error, the answer is 'D'. (Ignore the errors of punctuation, if any)

51. (a) The Indian radio  
(b) Which was previously controlled by the British rulers  
(c) Is free now from the narrow vested interests  
(d) No error.
52. (a) Having received your letter (b) This morning, we are writing  
(c) To thank you for the same (d) No error
53. (a) The students were (b) Awaiting for  
(c) The arrival of the chief guest (d) No error
54. (a) Last month we celebrated  
(b) The wedding of our sister for whom  
(c) We have been looking for a suitable alliance for three years  
(d) No error
55. (a) The single biggest gainer in this process  
(b) Was ITC's Gold Flake Kings sales are Estimated  
(c) To have moved up from 50 million to 200 million sticks per month during 1987 and last year  
(d) No error

In the following the questions (Questions 56 to 60) choose the word which best expresses the meaning of the given word.

56. EMBEZZLE

- |                    |             |
|--------------------|-------------|
| (a) Misappropriate | (b) Balance |
| (c) Remunerate     | (d) Clear   |

57. FEEBLE

- |              |          |
|--------------|----------|
| (a) Weak     | (b) Vain |
| (c) Arrogant | (d) Sick |

58. CANTANKEROUS

- |                   |           |
|-------------------|-----------|
| (a) Quarrelsome   | (b) Rash  |
| (c) Disrespectful | (d) Noisy |

59. INSOMNIA

- |                 |                     |
|-----------------|---------------------|
| (a) Lethargy    | (b) Sleeplessness   |
| (c) Drunkenness | (d) Unconsciousness |

60. GARRULITY

- |                    |                  |
|--------------------|------------------|
| (a) Credulity      | (b) Senility     |
| (c) Loquaciousness | (d) Speciousness |

In the following questions (Questions 61 to 65) choose the word which is the exact OPPOSITE of the given words.

61. FLAGITIOUS

- (a) Innocent
- (c) Ignorant

- (b) Vapid
- (d) Frivolous

62. SACROSANCT

- (a) Irreligious
- (c) Irreverent

- (b) Unethical
- (d) Unholy

63. LOQUACIOUS

- (a) Reticent
- (c) Garrulous

- (b) Talkative
- (d) Verbose

64. FRUGAL

- (a) Copious
- (c) Generous

- (b) Extravagant
- (d) Ostentatious

65. INSIPID

- (a) Tasty
- (c) Discreet

- (b) Stupid
- (d) Feast

Which of the phrases given below (Questions 66 to 70) each sentence should replace the phrase printed in bold type to make the grammatically correct?

66. There are not many men who are so famous that they are frequently referred by their short names only
- (a) Initials (b) Signatures  
(c) Pictures (d) Middle names
67. I need not offer any explanation regarding this incident - my behaviour is speaking itself
- (a) will speak to itself (b) speaks for itself  
(c) has been speaking (d) speaks about itself
68. Anyone interested in the use of computers can learn much if you have access to a personal computer
- (a) They have access (b) Access can be available  
(c) He or she has access (d) One of them have access
69. It was unanimously resolved that the parties should unitedly undertook launching of popular programmes
- (a) Should be united undertook (b) Should be unitedly undertaken  
(c) Should be unitedly undertake (d) Should unitedly undertake
70. Later he became unpopular because he tried to lord it on his followers
- (a) To lord it for (b) To lord over  
(c) To lord it over (d) To lord it over on



Rearrange the following six sentences in proper sequence to form a meaningful paragraph and then answer the questions given below (Questions 71 to 75)

71. S1: There is a touching story of Professor Hardy visiting Ramanujan as he lay desperately ill in hospital at Puney.
- P: No Hardy, that is not a dull number in the very least
- Q: Hardy, who was a very shy man, could not find the words for his distress
- R: It was 1729
- S: The best he could do, as he got to the beside was "I say Ramanujan, I thought the number of taxi I came down in was a very dull number"
- S6: It is the lowest number that can be expressed in two different ways as the sum of two cubes

The Proper sequence should be:

- (a) PRSQ (b) QSRP
- (c) QSPR (d) SQRP
72. S1: I took cigarettes from my case
- P: But when the fit of coughing was over, he replaced it between his lips
- Q: I lit one of them and placed it between the lips
- R: Then with a feeble hand he removed the cigarette
- S: Slowly he took a pull at it and coughed violently
- S6: Then he continues to draw on it

The Proper sequence should be :

- (a) PSQR (b) QPSR
- (c) QSRP (d) SRPQ

73. S1: The future beckons to us.  
P: In fact we have hard work ahead  
Q: Where do we go and what shall be our endeavour?  
R: We shall also have to fight and end poverty, ignorance and disease  
S: It will be to bring freedom and opportunity to the common man  
S6: There is no resting for any one of us till we redeem our pledge in full.

The Proper sequence should be:

- (a) PSRQ (b) QPSR  
(c) QSRP (d) SRPQ

74. S1: A ceiling on urban property.  
P: No mill-owner could own factories or mills or plants  
Q: And mass circulation papers  
R: Would mean that  
S: No press magnate could own printing presses  
S6: since their value would exceed the ceiling fixed by the government

The proper sequence should be :

- (a) QSRP (b) RPSQ  
(c) SRPQ (d) QPSR

75. S1: A man can be physically confined within stone walls  
P: But his mind and spirit will still be free  
Q: Thus his freedom of action may be restricted  
R: His hopes and aspiration still remain with him  
S: Hence, he will be free spiritually if not physically  
S6: No tyranny can intimidate a lover of liberty

The Proper sequence should be:

- (a) PQRS (b) SRQP  
(c) QPRS (d) QPSR

Each of the following questions contains a small paragraph followed by a question on it. Read each paragraph carefully and answer the questions given below:

Many sociologists have argued that there is functional relationship between education and economic system. They point to the fact that mass formal education began in industrial society. They note that the expansion of the economies of industrial societies is accompanied by a corresponding expansion of their educational systems. They explain this correspondence in terms of the needs of industry for skilled and trained manpower, needs which are met by the educational system. Thus, the provision of mass elementary education in Britain in 1870 can be seen as a response to the needs of industry for a literate and numerate workforce at a time when industrial processes were becoming more complex and the demand for technical skills was steadily growing.

76. The industry needs a literate work-force because
- Its expansion needs sound learning
  - It relies heavily on expertise
  - It promotes a competitive spirit
  - Its operations need intricate technical knowledge
77. The author argues that
- Formal education can be traced to industrial society
  - Industrial society is responsible for expansion of education at mass level
  - Industrial society gave rise to vocational education
  - Industrial society changed the pattern of education
78. The observation of the Sociologists are based on a study of
- The statistical data available in a historical context
  - Economic system of the 19th century
  - The correlation between industry and education in a historical context
  - Growth of industry 19th century
79. The Sociologists referred to it in the passage say that the relationship between industry and elementary education was one
- Based on mutual need
  - Based entirely on the need of the industry
  - Based entirely on economic need
  - Based on some inexplicable historical forces
80. By 'functional relationship' is meant
- A short-term relationship
  - Practical and utilitarian relationship
  - Temporary arrangement
  - Close and unbreakable relationship

Find the correctly spelt words. (Questions 81 to 85)

81. (a) Itinarery (b) Itinerary  
(c) Itenary (d) Itinary
82. (a) Velnerable (b) Vulnarable  
(c) Vulnerable (d) Valnerable
83. (a) Eflorescenc (b) Eflorescence  
(c) Efflorescence (d) Efflorascence
84. (a) Hindrance (b) Hinderrance  
(c) Hindrence (d) Hinderence
85. (a) Lckadaisicle (b) Lackdaisical  
(c) Lackadisical (d) Lackadaisical

One word Substitute (Questions 86 to 90):

86. A style in which a writer makes a display of his knowledge  
(a) Pedantic (b) Verbose  
(c) Pompous (d) Ornate
87. In a state of tension or suspense  
(a) Off balance (b) Depressed  
(c) Diffused (d) On tenterhooks
88. The absence of law and order  
(a) Rebellion (b) Anarchy  
(c) Mutiny (d) Revolt
89. One absorbed in his own thoughts and feelings rather than in things outside  
(a) Scholar (b) Recluse  
(c) Introvert (d) Intellectual
90. One who believes that all things and events in life are predetermined is a  
(a) Fatalist (b) Puritan  
(c) Egoist (d) Tyraant

CHANGE VOICE :

91. The teacher marks the attendance every period
- (a) The attendance was marked by the teacher every period
  - (b) The attendance is marked by the teacher every period
  - (c) The attendance is marked by the teacher
  - (d) The attendance was marked every period by the teacher
92. The tourists did not visit the place
- (a) The place is not visited by the tourists
  - (b) The place has not been visited by the tourists
  - (c) The place was not visited by the tourists
  - (d) The place cannot be visited by the tourists
93. I was fascinated by the picture
- (a) The picture fascinated me
  - (b) The picture fascinates me
  - (c) The picture is fascinating me
  - (d) The picture has fascinated me
94. The bicycle was being painted green by him
- (a) He was painting the bicycle green
  - (b) He is painting the bicycle green
  - (c) Green was painting the bicycle
  - (d) He painted the bicycle green
95. Somebody took her to the hospital
- (a) She is taken to the hospital
  - (b) She is being taken to the hospital
  - (c) She has been taken to the hospital
  - (d) She was taken to the hospital

Directions (Questions 96 to 100)

In the following passage there are blanks each of which has been numbered. These numbers are printed below the passage and the against. Each four words are suggested. One of which fits the blank appropriately. Find out the appropriate word in each case.

Most experts agree that even people who think they are sleeping enough would probably be better of with more 96. As evidence of a general sleep deficit, they prove the use of the bedside alarm clock used by people to 97 their working hours. The most relentless robber of sleep is the complexity of everyday life. Whenever pressures from work, family and community 98 many people dispense with sleep. Another 99 of sleep in the shift work. The availability of round-the-clock entertainment, especially all-night television, also takes its 100.

96. \_\_\_\_\_

(a) Work

(b) Freedom

(c) Rest

(d) Energy

97. \_\_\_\_\_

(a) Widen

(b) Prolong

(c) Disturb

(d) Minimize

98. \_\_\_\_\_

(a) Unite

(b) Diminish

(c) Happen

(d) Mount

99. \_\_\_\_\_

(a) Thief

(b) Study

(c) Contributor

(d) Producer

100. \_\_\_\_\_

(a) Toll

(b) Risk

(c) Credit

(d) Enjoyment